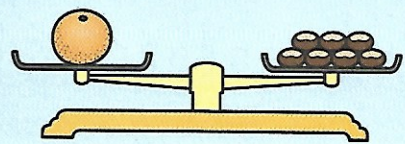
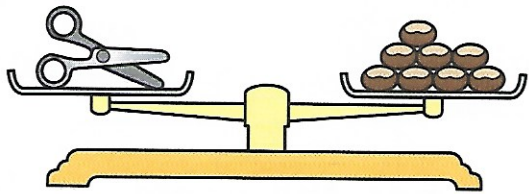


Weight




Count the number of conkers on each balance. Write the correct numeral.

a



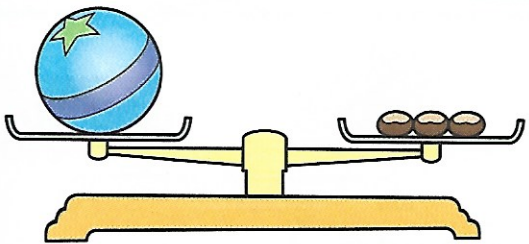
The scissors weigh ___ conkers.

b



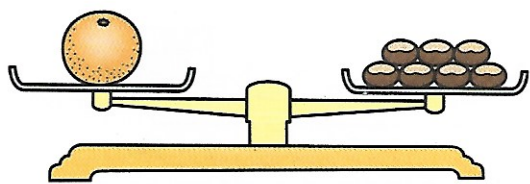
The pear weighs ___ conkers.

c



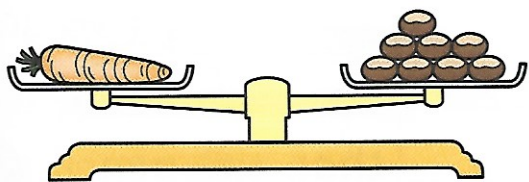
The ball weighs ___ conkers.

d




The orange weighs ___ conkers.

e



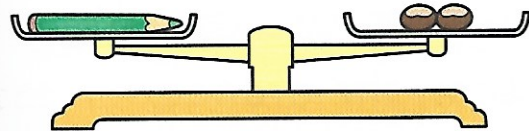
The carrot weighs ___ conkers.

f



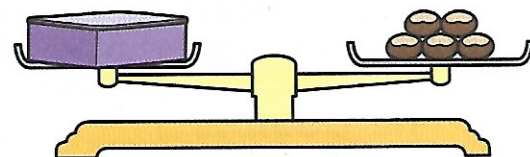
The book weighs ___ conkers.

g



The pencil weighs ___ conkers.

h



The lunchbox weighs ___ conkers.

Write.

The _____ is the heaviest of all.

The _____ is the lightest of all.

The _____ and _____ weigh the same.

