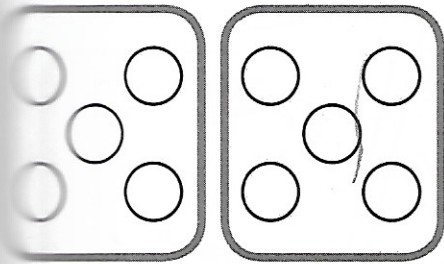


Combine (totals up to 10)




$$5 + 5 = 10$$

Count the number in each set. **Add** and **write**.

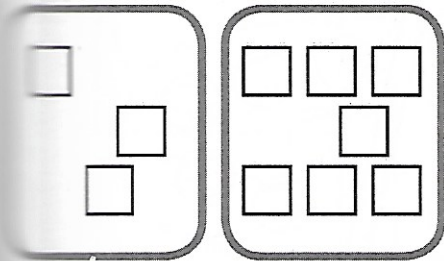


$$\square + \square = \square$$

b

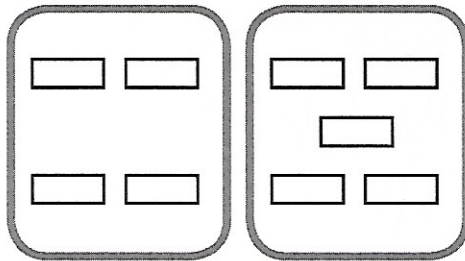


$$\square + \square = \square$$

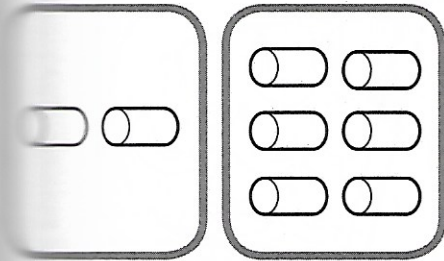


$$\square + \square = \square$$

d




$$\square + \square = \square$$

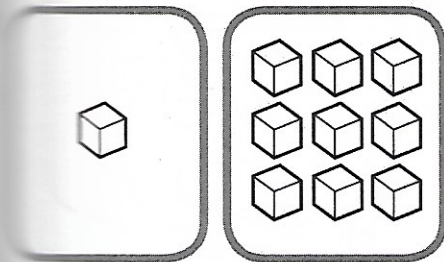


$$\square + \square = \square$$

f

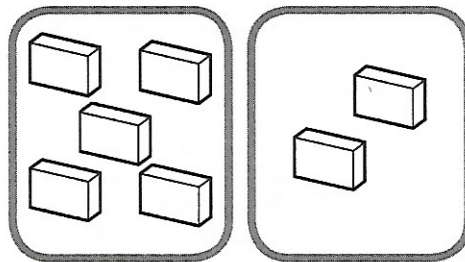


$$\square + \square = \square$$



$$\square + \square = \square$$

h



$$\square + \square = \square$$

